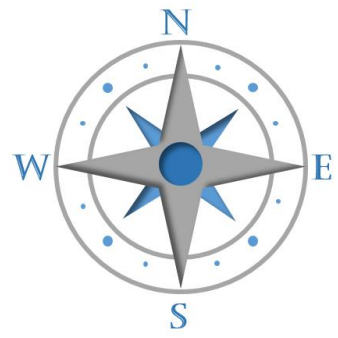


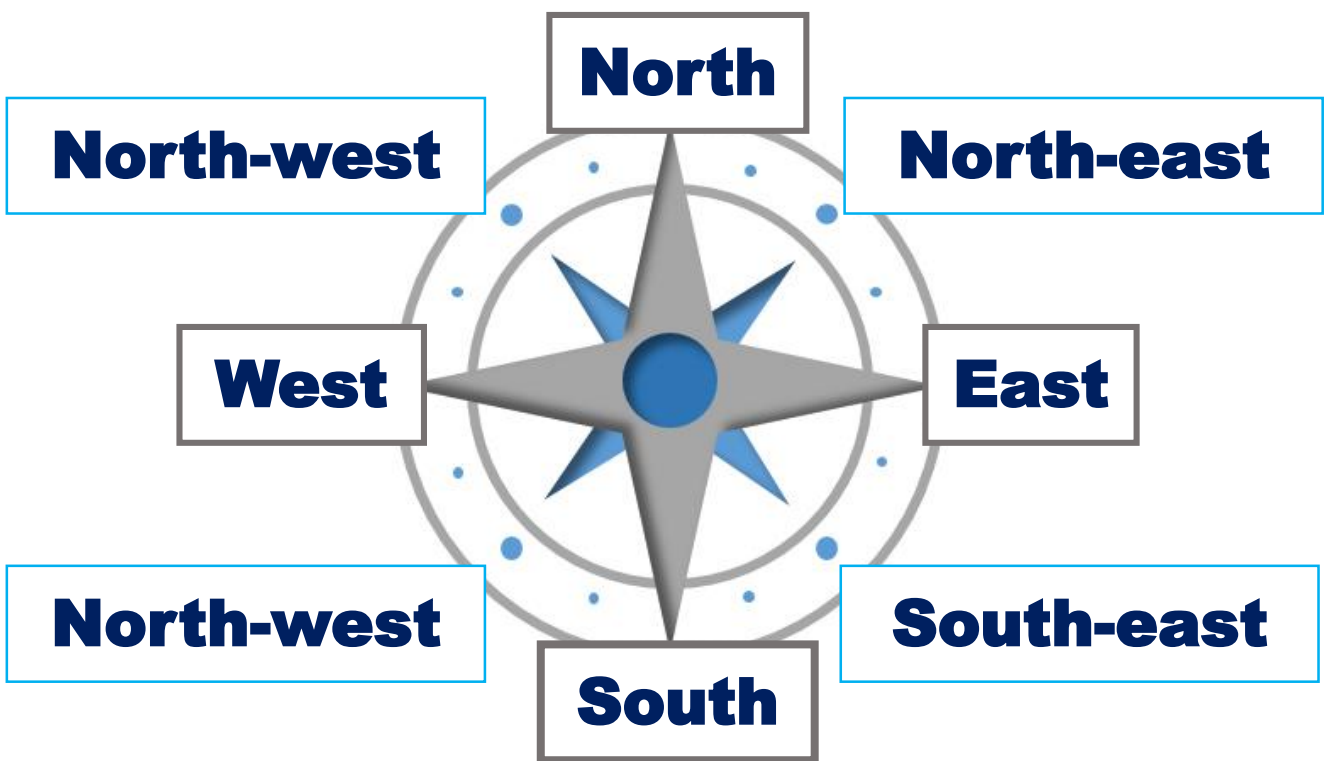


COMPASS DIRECTIONS



Cardinal directions are the four main points of a compass- North, South, East and West. They are often known by their first letters- N,S,E and W.

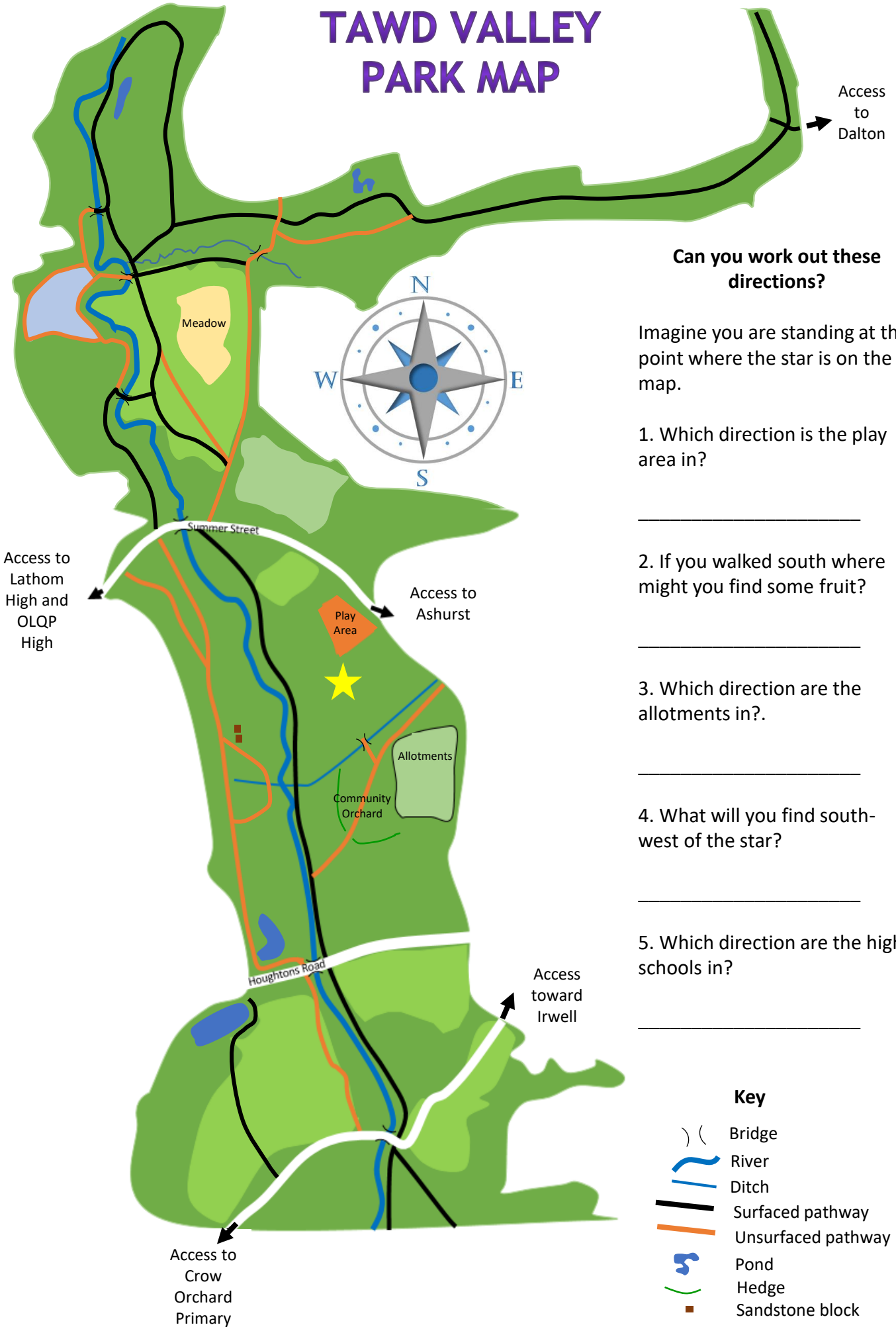
Ordinal directions are the points on a compass in between the cardinal directions- North-West (NW), North-East (NE), South-West (SW) and South-East (SE).



Using the Tawd Valley Park map try discovering if you can find the orientate yourself on the map.

Once you have had a go to Tawd Valley Park and see if you can follow the compass directions to the places you found.

TAWD VALLEY PARK MAP



Can you work out these directions?

Imagine you are standing at the point where the star is on the map.

1. Which direction is the play area in?









2. If you walked south where might you find some fruit?

3. Which direction are the allotments in?

4. What will you find south-west of the star?

5. Which direction are the high schools in?

Key

-  Bridge
-  River
-  Ditch
-  Surfaced pathway
-  Unsurfaced pathway
-  Pond
-  Hedge
-  Sandstone block

TAWD VALLEY PARK MAP



Can you work out these directions?

Imagine you are standing at the point where the star is on the map.

1. Which direction is the play area in?

North

2. If you walked south where might you find some fruit?

The community orchard

3. Which direction are the allotments in?

South-east

4. What will you find south-west of the star?

Sandstone blocks

5. Which direction are the high schools in?

North-west

Key

- Bridge
- River
- Ditch
- Surfaced pathway
- Unsurfaced pathway
- Pond
- Hedge
- Sandstone block