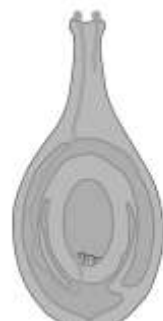


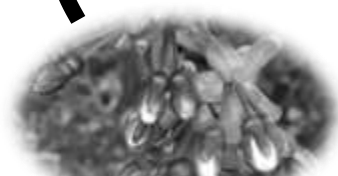




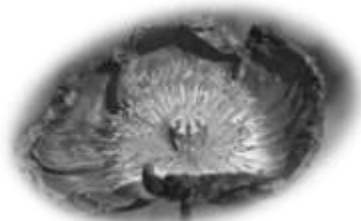
PLANT LIFE CYCLE



Can you name the stages of the plant life cycle in the boxes provided? The first letter is provided to help.



Bees have different length tongues so they are not competing to feed from all the same flowers. Can you guess which bees feed from which flowers? Draw a line from the bees to the correct flowers.



Long
tongued bee



Short
tongued bee



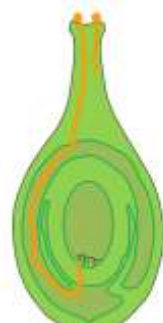
PLANT LIFE CYCLE



Flowering



Pollination



Fertilisation



Seed Dispersal



Germination



Budding

Can you name the stages of the plant life cycle in the boxes provided? The first letter is provided to help.

Bees have different length tongues so they are not competing to feed from all the same flowers. Can you guess which bees feed from which flowers? Draw a line from the bees to the correct flowers.



Long
tongued bee



Short
tongued bee

